




Podmořský svět pro druháčky 😊

Pomůžeš rybám vypočítat příklady?




$$? + 9 = 35$$

$$25 + ? = 100$$



$$? + 7 = 56$$

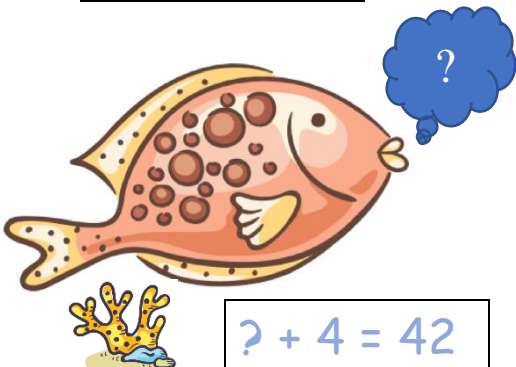
$$? - 6 = 66$$



$$? - 20 = 38$$




$$53 - ? = 47$$



$$? + 4 = 42$$



Řešení:




26

$$? + 9 = 35$$

$$25 + ? = 100$$

75



49

$$? + 7 = 56$$

$$? - 6 = 66$$


72



58

$$? - 20 = 38$$

6



$$53 - ? = 47$$

38

$$? + 4 = 42$$

